

CLASS – 11

WORKSHEET- Laws of Motion

(1 mark questions)

1. Define angle of friction.

2. Define impulse.

3. Action and reaction are equal and opposite. Why cannot they cancel each other?

4. Physical independence of force is a consequence of
(a) first law of motion (b) second law of motion
(c) third law of motion (d) all of these laws.

5. The magnitude of the net force acting on a car moving with a constant velocity of 30 km/h is
(a) 15N (b) 20N (c) 30N (d) zero

6. A body under the action of a force $\vec{F} = 6\hat{i} - \hat{j}$ N acquires an acceleration of 5 ms^{-2} . The mass of the body is
(a) 2kg (b) 5kg (c) 4kg (d) 6kg

7. A book is lying on the table. What is the angle between the action of the book on the table and the reaction of the table on the book?
(a) 0° (b) 45° (c) 90° (d) 180°

8. Which one of the following statements is not true?
- (a) The same force for the same time causes the same change in momentum for different bodies.
 - (b) The rate of change of momentum of a body is directly proportional to the applied force and takes place in the direction the force acts.
 - (c) A greater opposing force is needed to stop a heavy body than a light body in the same time, if they are moving with the same speed.
 - (d) The greater the change in the momentum in a given time, the lesser is the force that needs to be applied.

9. The quantity which remains conserved in rocket propulsion
- (a) Impulse
 - (b) Force
 - (c) Momentum
 - (d) Acceleration

10. A body subjected to three concurrent forces is found to be in equilibrium. The resultant of any two forces.
- (a) is equal to third force
 - (b) is opposite to third force
 - (c) is collinear with the third force
 - (d) all of these

11. What is the condition for equilibrium of an object?

12. Why are tyres made of rubber not of steel?

13. In a tug of war, the team that pushes harder against the ground wins. Why?

14. What happens to a stone tied to the end of a string and whirled in a circle if the string suddenly breaks?

15. Give the magnitude and direction of the net force acting on
(a) a drop of rain falling down with a constant speed

- (b) a cork of mass 10 g floating on water

- (c) a kite skillfully held stationary in the sky


- (d) a car moving with a constant velocity of 30 km/h on a rough road

- (e) a high-speed electron in space far from all material objects, and free of electric and magnetic fields.

16. A pebble of mass 0.05 kg is thrown vertically upwards. Give the direction and magnitude of the net force on the pebble,
(a) during its upward motion

- (b) during its downward motion

- (c) at the highest point where it is momentarily at rest. Do your Solutions change if the pebble was thrown at an angle of 45° with the horizontal direction? Ignore air resistance.

 [Ans. (a) 0.5N vertically downwards (b) 0.5N vertically downwards (c) 0.5N vertically downwards]

17. Give the magnitude and direction of the net force acting on a stone of mass 0.1 kg,
(a) just after it is dropped from the window of a stationary train

- (b) just after it is dropped from the window of a train running at a constant velocity of 36 km/h

(c) just after it is dropped from the window of a train accelerating with 1 m s^{-2}

(d) lying on the floor of a train which is accelerating with 1 m s^{-2} , the stone being at rest relative to the train. Neglect air resistance throughout.

[Ans. (a) 1N vertically downwards (b) 1N vertically downwards (c) 1N vertically downwards (d) 0.1N vertically downwards]

18. One end of a string of length l is connected to a particle of mass m and the other to a small peg on a smooth horizontal table. If the particle moves in a circle with speed v the net force on the particle (directed towards the centre) is :

- (i) T (ii) $T - mv^2/l$ (iii) $T + mv^2/l$ (iv) 0
-
-

19. A constant retarding force of 50 N is applied to a body of mass 20 kg moving initially with a speed of 15 m s^{-1} . How long does the body take to stop? [Ans. 6s]

20. A stone of mass m tied to the end of a string is revolving in a vertical circle of radius R . The net force at the lowest and highest points of the circle directed vertically downwards are: (choose the correct alternative).

- | | Lowest Point | Highest Point |
|-----|-------------------------|-------------------------|
| (a) | $mg - T_1$ | $mg + T_2$ |
| (b) | $mg + T_1$ | $mg - T_2$ |
| (c) | $mg + T_1 - (mv_1^2)/R$ | $mg - T_2 + (mv_1^2)/R$ |
| (d) | $mg - T_1 - (mv_1^2)/R$ | $mg + T_2 + (mv_1^2)/R$ |
-
-

(2marks questions)

21. A cyclist riding at a speed of $14\sqrt{3} \text{ ms}^{-1}$ takes a turn around a circular road of radius $20\sqrt{3} \text{ m}$. What is the inclination to the vertical? [Ans. 60°]

22. An aero-plane travelling at a speed of 500 kmh^{-1} tilts at an angle of 30° as it makes a turn. What is the radius of the curve? [Ans. $3.41 \times 10^3 \text{ m}$]

23. Sand is thrown on tracks covered with snow. Why?

24. It is difficult to move a cycle along a road with its brakes on. Explain.

25. Why do we slip on a rainy day?

26. A horse has to apply more force to start a cart than to keep it moving. Why?

27. A cricketer lowers his hands to catch the ball safely. Explain, why?

28. Why does a cyclist bend inwards while riding along a curved road?

29. State Newton's second law of motion. Show that it gives a measure of force. Hence define 1N force.

30. State that Newton's second law of motion is the real law of motion.

31. State Newton's third law of motion. Derive the law of conservation of linear momentum from it.

32. An astronaut accidentally gets separated out of his small spaceship accelerating in interstellar space at a constant rate of 100 ms^{-2} . What is the acceleration of the astronaut the instant after he is outside the spaceship?

33. It is difficult to push a box full of clothes than an empty box. Explain.

34. Prove impulse-momentum theorem.

35. Why is friction called self-adjusting force?

36. Proper inflation of tyres of vehicles saves fuel. Why?

37. How does friction help in walking? Explain.

38. Use component of force, show that it is easier to pull a lawn roller than to push it.

39. A nucleus is at rest in the laboratory frame of reference. Show that if it disintegrates into two smaller nuclei, the products must move in opposite directions.

40. A shell of mass 0.020 kg is fired by a gun of mass 100 kg. If the muzzle speed of the shell is 80 ms^{-1} . What is the recoil speed of the gun? [Ans. -0.016 ms^{-1}]

41. A batsman deflects a ball by an angle of 45° without changing its initial speed which is equal to 54 km/h. What is the impulse imparted to the ball? (Mass of the ball is 0.15 kg.) [Ans. 4.16 kg/ms]

42. An aircraft executes a horizontal loop at a speed of 720 km/h with its wings banked at 15° . What is the radius of the loop? [Ans. 15.24 km]

(3 marks questions)

43. A bus starts from rest accelerating uniformly with 4 ms^{-2} . At $t = 10\text{s}$, a stone is dropped out of a window of the bus 2m high. What are the (i) magnitude of velocity and (ii) acceleration of the stone at 10.2s? Take $g = 10 \text{ ms}^{-2}$. [Ans. 40.04 m/s, 0]

44. A body of mass m moves along X-axis such that its position coordinate at any instant t is $x = at^4 - bt^3 + ct$, where a , b , and c are constants. What is the force acting on the particle at any instant t ?

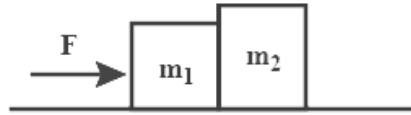
-
-
-
45. A truck starts from rest and rolls down a hill with constant acceleration. It travels a distance of 400m in 20s. Calculate the acceleration and the force acting on it if its mass is 7 metric tons. [Ans. 2ms^{-2} , 14000N]

-
-
-
46. A ball moving with an momentum of 5 kg ms^{-1} strikes against a wall at an angle of 45° and is refracted at the same angle. Calculate the change in momentum. [Ans. -7.07 kg ms^{-1}]

-
-
-
47. A 70kg man in sea is being lifted by a helicopter with the help of a rope which can bear a maximum tension of 100 kg wt. With what maximum acceleration the helicopter should rise so that the rope may not break? Take $g = 9.8\text{ ms}^{-2}$. [Ans. 4.2 ms^{-2}]

-
-
-
48. Fuel is consumed at the rate of 50 g per second in a rocket. The exhaust gases are rejected at the rate of $5 \times 10^5\text{ cms}^{-1}$. What is the thrust experienced by the rocket? [Ans. 250N]
-
-
-
-

-
-
49. Two blocks of masses m_1 and m_2 in contact lie on a horizontal smooth surface as shown in fig. The blocks are pushed by a force F . If the two blocks are always in contact, what is the force at their common interface?



-
-
50. A scooter weighs 120 kg f. Brakes are applied so that wheels stop rolling and start skidding. Find the force of friction if the coefficient of friction is 0.4. [Ans. 48 kg f]

-
-
51. A suitcase is gently dropped on a conveyor belt moving at 3 m/s. If the coefficient of friction between the belt and the suitcase is 0.5, how far will the suitcase move on the belt before coming to rest? [Ans. 0.92m]

-
-
52. A block of mass 2kg rests on a plane inclined at an angle of 30° with the horizontal. The coefficient of friction between the block and the surface is 0.7. What will be the frictional force acting on the block? [Ans. 11.9N]
-
-

53. A child revolves a stone of mass 0.5kg tied to the end of the string of length 40cm in a vertical circle. The speed of the stone at the lowest point of the circle is 3 ms^{-1} . Calculate the tension in the string at this point. [Ans. 16.15N]

54. Explain, why
(a) The passengers are thrown forward from their seats, when a speeding bus tops suddenly.
(b) Does a cricketer moves his hand backwards while holding a catch?
(c) Is the boat pushed away when a man jumps out of the boat?

55. A hammer of mass 1kg moving with a speed of 6 ms^{-1} strikes a wall and comes to rest in 0.1s. Calculate (a) the impulse of force (b) the retardation of the hammer, and (c) the retarding force that stops the hammer.

56. A 100kg gun fires a ball of 1kg horizontally from a cliff of height 500m. It falls on the ground at a distance of 400m from the bottom of the cliff. Find the recoil velocity of the gun. (acceleration due to gravity = 10 ms^{-2})

57. Why does a gun recoil on firing? What is recoil velocity? Find the expression for it.

58. State laws of friction.

59. A constant force acting on a body of mass 3.0 kg changes its speed from 2.0 ms^{-1} to 3.5 ms^{-1} in 25 s. The direction of the motion of the body remains unchanged. What is the magnitude and direction of the force? [Ans. 0.18N]

60. A body of mass 5 kg is acted upon by two perpendicular forces 8 N and 6 N. Give the magnitude and direction of the acceleration of the body. [Ans. 36.87° , with 8N force]

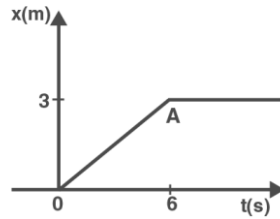
61. The driver of a three-wheeler moving at a speed of 36 km/h sees a child standing in the middle of the road and brings his vehicle to rest in 4.0 s just in time to save the child. What is the average retarding force on the vehicle? The mass of the three-wheeler is 400 kg, and the mass of the driver is 65 kg. [Ans. 1162.5N]

62. A rocket with a lift-off mass of 20,000 kg is blasted upwards with an initial acceleration of 5.0 ms^{-2} . Calculate the initial thrust (force) of the blast. [Ans. $2.96 \times 10^5 \text{ N}$]

63. A truck starts from rest and accelerates uniformly at 2.0 ms^{-2} . At $t = 10 \text{ s}$, a stone is dropped by a person standing on the top of the truck (6 m high from the ground). What are the (a) velocity, and (b) acceleration of the stone at $t = 11 \text{ s}$? (Neglect air resistance.) (Take $g = 10 \text{ ms}^{-2}$) [Ans. (i) 22.4 ms^{-1} , 26.7° , (ii) 10 ms^{-2}]

64. A bob of mass 0.1 kg hung from the ceiling of a room by a string 2 m long is set into oscillation. The speed of the bob at its mean position is 1 ms^{-1} . What is the trajectory of the bob if the string is cut when the bob is (a) at one of its extreme positions, (b) at its mean position?

65. Figure shows the position-time graph of a particle of mass 4 kg. What is the (a) force on the particle for $t < 0$, $t > 4$ s, $0 < t < 4$ s? (b) impulse at $t = 0$ and $t = 4$ s? (Consider one-dimensional motion only).



[Ans. 0, 3 kg ms⁻¹, - 3 kg ms⁻¹]

66. Two bodies of masses 10 kg and 20 kg respectively kept on a smooth, horizontal surface are tied to the ends of a tight string. A horizontal force $F = 600$ N is applied to (i) A, (ii) B along the direction of string. What is the tension in the string in each case?

[Ans. 200N, 400N]

67. Two masses 8 kg and 12 kg are connected at the two ends of a light inextensible string that goes over a frictionless pulley. Find the acceleration of the masses and the tension in the string when the masses are released.

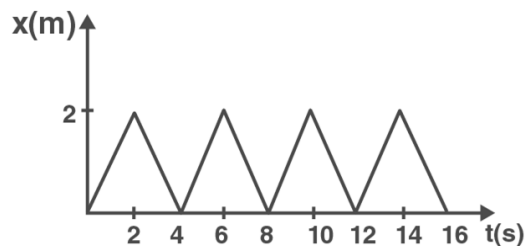
[Ans. 2ms⁻², 96N]

68. Two billiard balls, each of mass 0.05 kg, moving in opposite directions with speed 6m/s collide and rebound with the same speed. What is the impulse imparted to each ball due to the other? [Ans. – 0.6 kg/ms, 0.6 kg/ms]

69. A stone of mass 0.25 kg tied to the end of a string is whirled round in a circle of radius 1.5 m with a speed of 40 rev./min in a horizontal plane. What is the tension in the string? What is the maximum speed with which the stone can be whirled around if the string can withstand a maximum tension of 200 N? [Ans. 6.6N, 34.6 ms⁻¹]

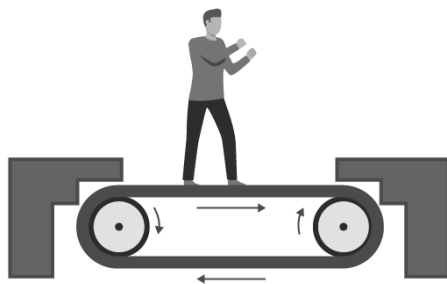
70. If in problem 69, the speed of the stone is increased beyond the maximum permissible value, and the string breaks suddenly, which of the following correctly describes the trajectory of the stone after the string breaks:
- (a) the stone moves radially outwards,
 - (b) the stone flies off tangentially from the instant the string breaks,
 - (c) the stone flies off at an angle with the tangent whose magnitude depends on the speed of the particle?

71. Figure shows the position-time graph of a particle of mass 0.04 kg. Suggest a suitable physical context for this motion. What is the time between two consecutive impulses received by the particle? What is the magnitude of each impulse?



[Ans. $8 \times 10^{-4} \text{ kg ms}^{-1}$]

72. Figure shows a man standing stationary with respect to a horizontal conveyor belt that is accelerating with 1 ms^{-2} . What is the net force on the man? If the coefficient of static friction, between the man's shoes and the belt is 0.2, up to what acceleration of the belt can the man continue to be stationary relative to the belt? (Mass of the man = 65 kg.)



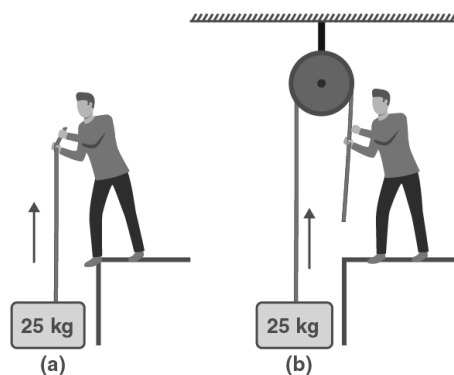
[Ans. 65N, 1.96 ms^{-2}]

73. A stream of water flowing horizontally with a speed of 15 m/s pushes out of a tube of cross-sectional area 10^{-2} m^2 and hits at a vertical wall nearby. What is the force exerted on the wall by the impact of water, assuming that it does not rebound? [Ans. 2250 N]

-
-
74. Ten one rupee coins are put on top of one another on a table. Each coin has a mass of m kg. Give the magnitude and direction of
- the force on the 7th coin (counted from the bottom) due to all coins above it.
 - the force on the 7th coin by the eighth coin and
 - the reaction of the sixth coin on the seventh coin. [Ans. $3mg$, $3mg$, $6mg$]
-
-
-
-
-

75. A train runs along an unbanked circular track of radius of 30 m at a speed of 54 km/h. The mass of the train is 10^6 kg. What provides the centripetal force required for this purpose the engine or the rails? What is the angle of banking required to prevent wearing out of the rail? [Ans. 37.4°]
-
-
-
-
-

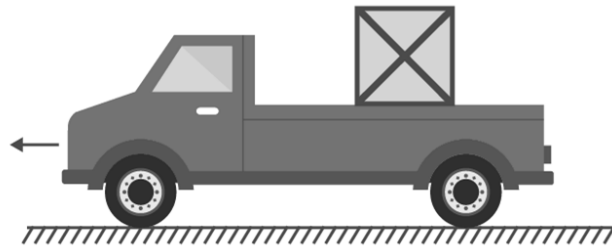
76. A block of mass 25 kg is raised by a 50 kg man in two different ways as shown in Fig. What is the action on the floor by the man in the two cases? If the floor yields to a normal force of 700 N, which mode should the man adopt to lift the block without the floor yielding?



[Ans. 735 N, 245 N]

77. A block of mass 15 kg is placed on a long trolley. The coefficient of static friction between the block and the trolley is 0.18. The trolley accelerates from rest with 0.5 ms^{-2} for 20 s and then moves with uniform velocity. Discuss the motion of the block as viewed by (a) a stationary observer on the ground, (b) an observer moving with the trolley.

78. The rear side of a truck is open and a box of 40 kg mass is placed 5 m away from the open end as shown in Fig. The coefficient of friction between the box and the surface below it is 0.15. On a straight road, the truck starts from rest and accelerates with 2 ms^{-2} . At what distance from the starting point does the box fall off the truck? (Ignore the size of the box). [Ans. 18.57m]



79. A disc revolves with a speed of $33 \frac{1}{3}$ rpm and has a radius of 15 cm. Two coins are placed at 4 cm and 14 cm away from the centre of the record. If the coefficient of friction between the coins and record is 0.15, which of the coins will revolve with the disc? (take $g = 9.8 \text{ ms}^{-2}$) [Ans. 12cm]

80. You may have seen in a circus a motorcyclist driving in vertical loops inside a 'death well' (a hollow spherical chamber with holes, so the spectators can watch from outside). Explain clearly why the motorcyclist does not drop down when he is at the uppermost point, with no support from below. What is the minimum speed required at the uppermost position to perform a vertical loop if the radius of the chamber is 25 m? [Ans. 15.65 ms^{-1}]

81. A 70 kg man stands in contact against the inner wall of a hollow cylindrical drum of radius 3 m rotating about its vertical axis with 200 rev/min. The coefficient of friction between the wall and his clothing is 0.15. What is the minimum rotational speed of the cylinder to enable the man to remain stuck to the wall (without falling) when the floor is suddenly removed? [Ans. 4.7 rad s^{-1}]

82. A thin circular loop of radius R rotates about its vertical diameter with an angular frequency ω . Show that a small bead on the wire loop remains at its lowermost point for $\omega \leq \sqrt{g/R}$. What is the angle made by the radius vector joining the centre to the bead with the vertically downward direction for $\omega = \sqrt{2g/R}$? Neglect friction. [Ans. 60°]

Physics with UJ